


NUMBER BONDS OF 10



$1 + 9 = 10$



$2 + 8 = 10$



$3 + 7 = 10$



$4 + 6 = 10$




$5 + 5 = 10$



$6 + 4 = 10$



$7 + 3 = 10$




$8 + 2 = 10$



$9 + 1 = 10$

LET'S PRACTICE NUMBER BONDS OF 10



USE YOUR NUMBER BONDS BLOCKS ABOVE TO HELP WITH THE SUMS BELOW

$$1 + \underline{\quad} = 10$$

$$2 + \underline{\quad} = 10$$

$$3 + \underline{\quad} = 10$$

$$4 + \underline{\quad} = 10$$

$$5 + \underline{\quad} = 10$$

$$6 + \underline{\quad} = 10$$

$$7 + \underline{\quad} = 10$$

$$8 + \underline{\quad} = 10$$

$$9 + \underline{\quad} = 10$$

$$5 + \underline{\quad} = 10$$

$$2 + \underline{\quad} = 10$$

$$7 + \underline{\quad} = 10$$

$$9 + \underline{\quad} = 10$$

$$1 + \underline{\quad} = 10$$

$$3 + \underline{\quad} = 10$$

$$6 + \underline{\quad} = 10$$

$$8 + \underline{\quad} = 10$$

$$4 + \underline{\quad} = 10$$