





## NUMBER BONDS OF 2



$$1 + 1 = 2$$

## LET'S PRACTICE NUMBER BONDS OF 2



$$1 + \underline{\quad} = 2$$