




## NUMBER BONDS OF 3




$$1 + 2 = 3$$



$$2 + 1 = 3$$

## LET'S PRACTICE NUMBER BONDS OF 3



$$1 + \underline{\quad} = 3$$

$$2 + \underline{\quad} = 3$$