





NUMBER BONDS OF 5




$$1 + 4 = 5$$



$$2 + 3 = 5$$




$$3 + 2 = 5$$



$$4 + 1 = 5$$

LET'S PRACTICE NUMBER BONDS OF 5



--	--	--	--	--

--	--	--	--	--

--	--	--	--	--

--	--	--	--	--

$$1 + \underline{\quad} = 5$$

$$\underline{\quad} + 3 = 5$$

$$\underline{\quad} + 2 = 5$$

$$4 + \underline{\quad} = 5$$