



NUMBER BONDS OF 6



$$1 + 5 = 6$$



$$2 + 4 = 6$$



$$3 + 3 = 6$$




$$4 + 2 = 6$$



$$5 + 1 = 6$$

LET'S PRACTICE NUMBER BONDS OF 6



USE YOUR NUMBER BONDS BLOCKS ABOVE TO HELP WITH THE SUMS BELOW

$$1 + \underline{\quad} = 6$$

$$2 + \underline{\quad} = 6$$

$$3 + \underline{\quad} = 6$$

$$4 + \underline{\quad} = 6$$

$$5 + \underline{\quad} = 6$$

$$4 + \underline{\quad} = 6$$

$$3 + \underline{\quad} = 6$$

$$1 + \underline{\quad} = 6$$

$$5 + \underline{\quad} = 6$$

$$2 + \underline{\quad} = 6$$