



# NUMBER BONDS OF 7



$$1 + 6 = 7$$



$$2 + 5 = 7$$



$$3 + 4 = 7$$



$$4 + 3 = 7$$




$$5 + 2 = 7$$



$$6 + 1 = 7$$

## LET'S PRACTICE NUMBER BONDS OF 7



USE YOUR NUMBER BONDS BLOCKS ABOVE TO HELP WITH THE SUMS BELOW

$$1 + \underline{\quad} = 7$$

$$2 + \underline{\quad} = 7$$

$$3 + \underline{\quad} = 7$$

$$4 + \underline{\quad} = 7$$

$$5 + \underline{\quad} = 7$$

$$6 + \underline{\quad} = 7$$

$$5 + \underline{\quad} = 7$$

$$1 + \underline{\quad} = 7$$

$$6 + \underline{\quad} = 7$$

$$4 + \underline{\quad} = 7$$

$$3 + \underline{\quad} = 7$$

$$2 + \underline{\quad} = 7$$