


# NUMBER BONDS OF 9



$$1 + 8 = 9$$



$$2 + 7 = 9$$



$$3 + 6 = 9$$



$$4 + 5 = 9$$




$$5 + 4 = 9$$



$$6 + 3 = 9$$




$$7 + 2 = 9$$



$$8 + 1 = 9$$

## LET'S PRACTICE NUMBER BONDS OF 9



USE YOUR NUMBER BONDS BLOCKS ABOVE TO HELP WITH THE SUMS BELOW

$1 + \underline{\quad} = 9$

$2 + \underline{\quad} = 9$

$3 + \underline{\quad} = 9$

$4 + \underline{\quad} = 9$

$5 + \underline{\quad} = 9$

$6 + \underline{\quad} = 9$

$7 + \underline{\quad} = 9$

$8 + \underline{\quad} = 9$

$4 + \underline{\quad} = 9$

$3 + \underline{\quad} = 9$

$7 + \underline{\quad} = 9$

$5 + \underline{\quad} = 9$

$1 + \underline{\quad} = 9$

$8 + \underline{\quad} = 9$

$2 + \underline{\quad} = 9$

$6 + \underline{\quad} = 9$